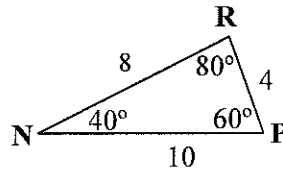
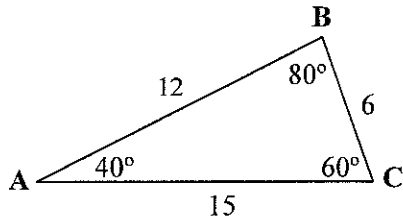


Lesson 10 ~ Congruent and Similar Triangles

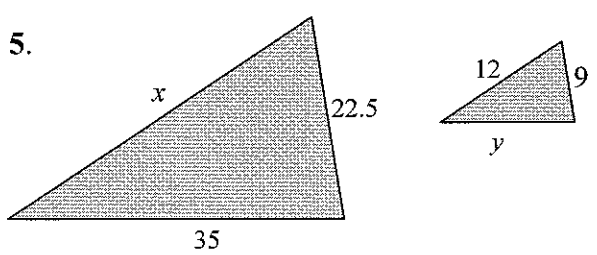
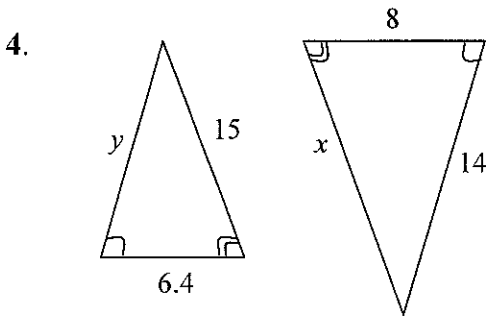
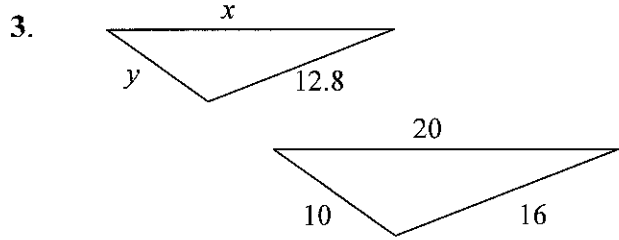
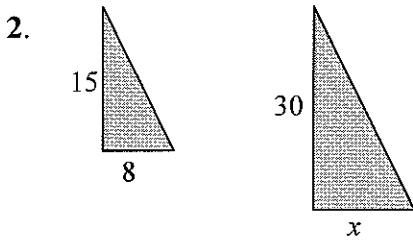
Name _____ Period _____ Date _____

1. List the corresponding sides and corresponding angles.



\overline{AB} corresponds to _____ $\angle A \cong \angle$ _____
 \overline{BC} corresponds to _____ $\angle B \cong \angle$ _____
 \overline{CA} corresponds to _____ $\angle C \cong \angle$ _____

Find the missing side length(s) for each set of similar figures.



6. Are the triangles below similar? Explain your answer.

