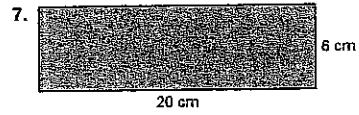
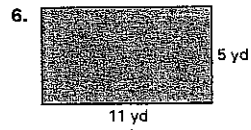
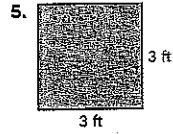



Find the perimeter ~~of the figure~~ of the rectangle or square.



The shaded figure is made of rectangles and/or squares. Find the perimeter ~~of the figure~~.

